

PROCEDURAL

2EP18

First name _____

Last name _____

School _____

Class _____

Date of birth ○○ ○○ ○○○○

Date of test ○○ 05 2018

Total score (maximum 28)



165057




Llywodraeth Cymru
Welsh Government

1 Count on in **tens**.

59 → 69 → → →



2

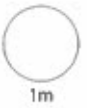


How many apples are there altogether?

apples



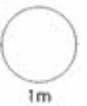
3 Write the number that is 2 more than 98



4 Tess has these coins.



How much does Tess have altogether?

 p

5 Write the numbers in order.

48

84

72

83

smallest

largest

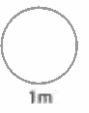


TOTAL



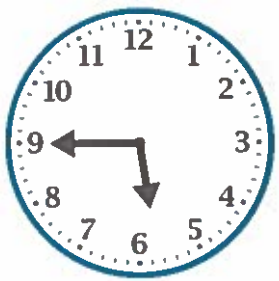
6

Double 9 =

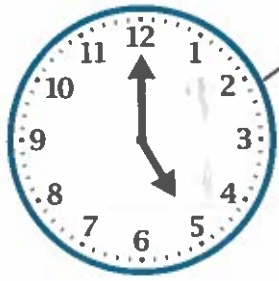


7

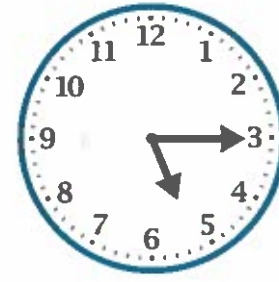
Join each clock to the correct time.



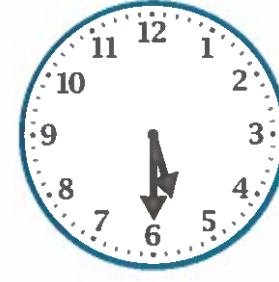
Five o'clock



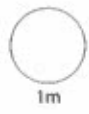
Quarter past five



Half past five




Quarter to six

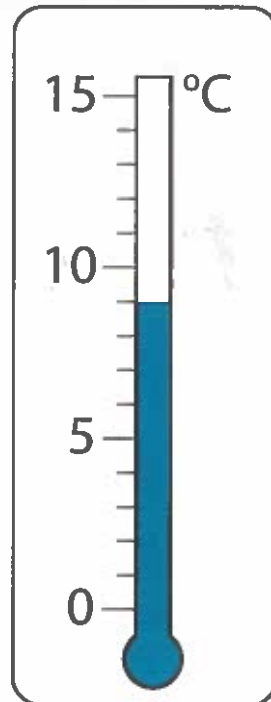


8 Use a ruler.

Join the two dots that are 7cm apart.



9 What is this temperature?

 °C

10

$50 - 30 =$



$7 \times 10 =$



11

5 biscuits in 1 bag



How many biscuits in 4 bags?

biscuits



Ross needs 35 biscuits.

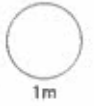
How many **bags** does he need?

bags



12 Choose two numbers to make this correct.

$$8 + \boxed{} = 6 + \boxed{}$$



13 Class 2: Favourite sandwiches

cheese	
tuna	
egg	
ham	

Key
 = 1 child

More children choose tuna than egg.

How many more?



3 children choose ham.

Show this on the chart.



14


$$27 + 8 = \boxed{}$$



$$57 - 11 = \boxed{}$$



15 What **fraction** of this shape is shaded?



16

$$7 + 15 = \boxed{} + 7$$

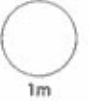


17 **Half** of a group of children are girls.

There are **10** girls.

How many **children** are there altogether?

children



18

1 lemon
25p



1 orange
40p

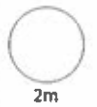


Ash buys **1** lemon and **1** orange.

He pays with **£1**

How much change does Ash get?

A large rectangular box for working out the answer. In the top-left corner, there is an icon of a notepad and a pencil. In the bottom-right corner, there is a smaller rectangular box containing the letter 'p'.



TOTAL



19 Mr Evans leaves home at

8 : 15

He gets back a **quarter of an hour** later.







At what time does he get back?

:



20 One shape is in the wrong place.

Put a cross (x) in it.

Has a right angle	Does not have a right angle
	
	
	



21

Circle the correct answer.

The mouse weighs

20 metres 20 kilograms 20 litres 20 grams



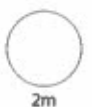
22 Seren has 90p altogether.

She has **two** 20p coins and some 10p coins.

How many 10p coins does she have?



She has 10p coins.



TOTAL

