

PROCEDURAL

3EP15

First name _____

Last name _____

School _____

Class _____

Date of birth ○○ ○○ ○○○○

Date of test ○○ 05 2015

Total score (maximum 30)



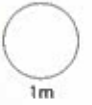
128912



Llywodraeth Cymru
Welsh Government

1 Circle **three** numbers that **add** to make 20

13 6 2 5 11

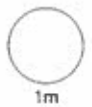


2 Write in order.

130 205 103 250

smallest

largest



3 $19 - 14 + 15 =$



4

What children in Year 3 like to do best

	tally for girls	tally for boys
football		
read		
cycle		
swim		

5 girls and 3 boys choose **cycle**.

Show this on the tally chart.

More girls than boys choose **swim**.

How many more?

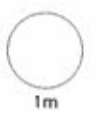
more girls




5

$$27 + 46 = \boxed{}$$

$$54 - 29 = \boxed{}$$




6



How heavy is the hamster?

grams

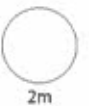


7 Join cards that have the **same** answer.

One is done for you.

$20 + 5$	3×3
$20 - 11$	5×5
$20 - 2$	7×4
$20 + 8$	8×3
	9×2

A line connects the box containing $20 + 5$ to the box containing 5×5 .



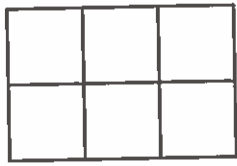
2m




TOTAL

5m


8 Here are five shapes.




A



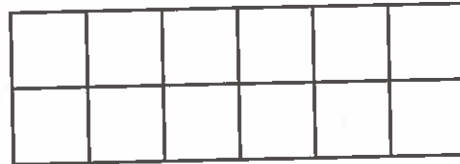
B



C



D



E

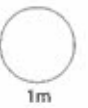
Which shape has the **greatest area**?

Write its letter.



Which two shapes have **equal areas**?

Write their letters.




1m



1m

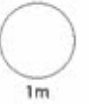
- 9 Poppy leaves school at 3:20pm.

Draw the minute hand to show this time.



Poppy gets home at 3:35pm.

How many minutes **before 4 o'clock** is that?

 minutes

- 10 5 biscuits in a pack.

How many in 6 packs?

 biscuits


Mr James buys 45 of these biscuits.

How many packs does he buy?

 packs

11 Anna has 1 metre of ribbon.
She cuts off 70cm.

How much ribbon is left?



Tom has 300cm of ribbon.
He cuts it into 50cm strips.

How many strips does he have?



12 Write these amounts of money in order.

£5.26

59p

£5.63

537p

smallest

largest



13 This book costs £7.00



Jack saves £1.50 a week to buy the book.

For how many weeks does he save?

weeks

14

Double 26 =

26 × 10 =

2m

1m

1m

TOTAL

7m

15 Find $\frac{1}{3}$ of 15



16 Write 183, 25 and 158 in the empty boxes.

$$\boxed{183} - \boxed{25} = \boxed{158}$$

so $\boxed{} + \boxed{} = \boxed{}$



Write 48, 4 and 12 in the empty boxes.

$$\boxed{48} \div \boxed{4} = \boxed{12}$$

so $\boxed{} \times \boxed{} = \boxed{}$



17

Potatoes



50p for 1 kilogram


Carrots



40p for 1 kilogram

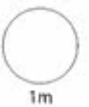
Sam buys $1\frac{1}{2}$ kilograms of potatoes.

How much does he pay?

 p


Lily buys 2 kilograms of carrots with a £1 coin.


How much change does she get?

 p


Ben buys some carrots and potatoes for £1.70

He buys 1 kilogram of potatoes.

How many kilograms of carrots does he buy?



kilograms

