

PROCEDURAL

3EP16

First name _____

Last name _____

School _____

Class _____

Date of birth ○○ ○○ ○○○○

Date of test ○○ 05 2016

Total score (maximum 30)



139102


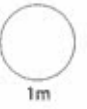


Llywodraeth Cymru
Welsh Government

1

$$17 + 9 = \boxed{}$$

$$17 - 9 = \boxed{}$$



2 Count **on** in threes.

$$19 \rightarrow 22 \rightarrow 25 \rightarrow \boxed{} \rightarrow \boxed{}$$



Count **back** in fours.

$$53 \rightarrow 49 \rightarrow 45 \rightarrow \boxed{} \rightarrow \boxed{}$$




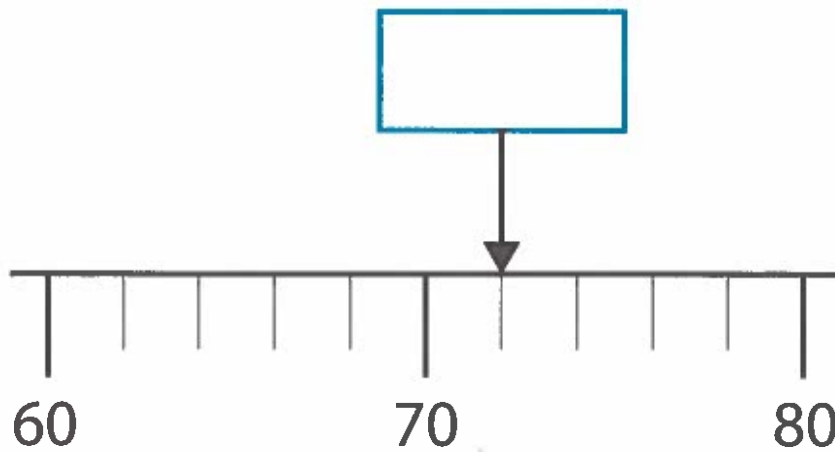
3 There are 20 children in Class B.

One-quarter are girls.

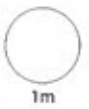
How many girls are there?

 girls

4 What number is the arrow pointing to?



5 $24 - 5 = 10 +$



6



50p for
one pack

How much do **4 packs** cost?

£

1m

There are **3** pens in one pack.

Aled needs **18** pens.

How many **packs** does he need?

packs

1m

7 A lesson **ends** at this time.

12 : 45

It lasted for **half an hour**.

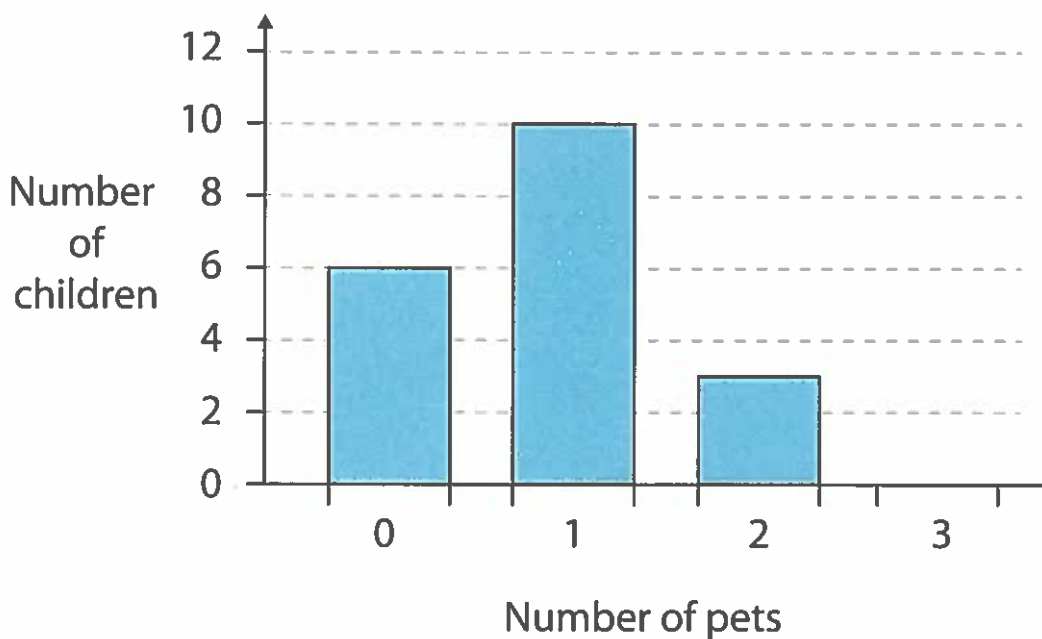
At what time did the lesson **start**?

:

1m

8

Pets children have



8 children have 3 pets.

Show this on the chart.

More children have 1 pet than have 2 pets.

How many **more**?

more

1m

1m

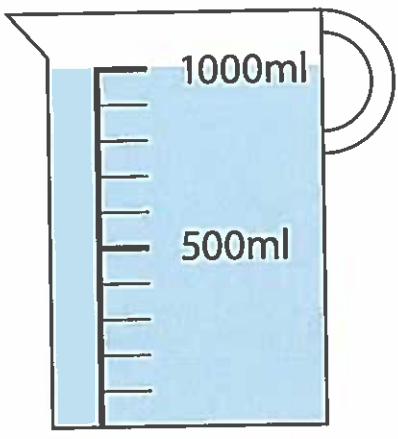
9

$$£2 - £1.20 + \boxed{p} = £1$$

1m

TOTAL
6m


10



1000ml of water is in this jug.

Rhian pours out 300ml.



How much water is left in the jug?

 ml


11

This shows the temperature at midday.

At midday it is °C

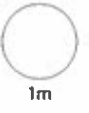
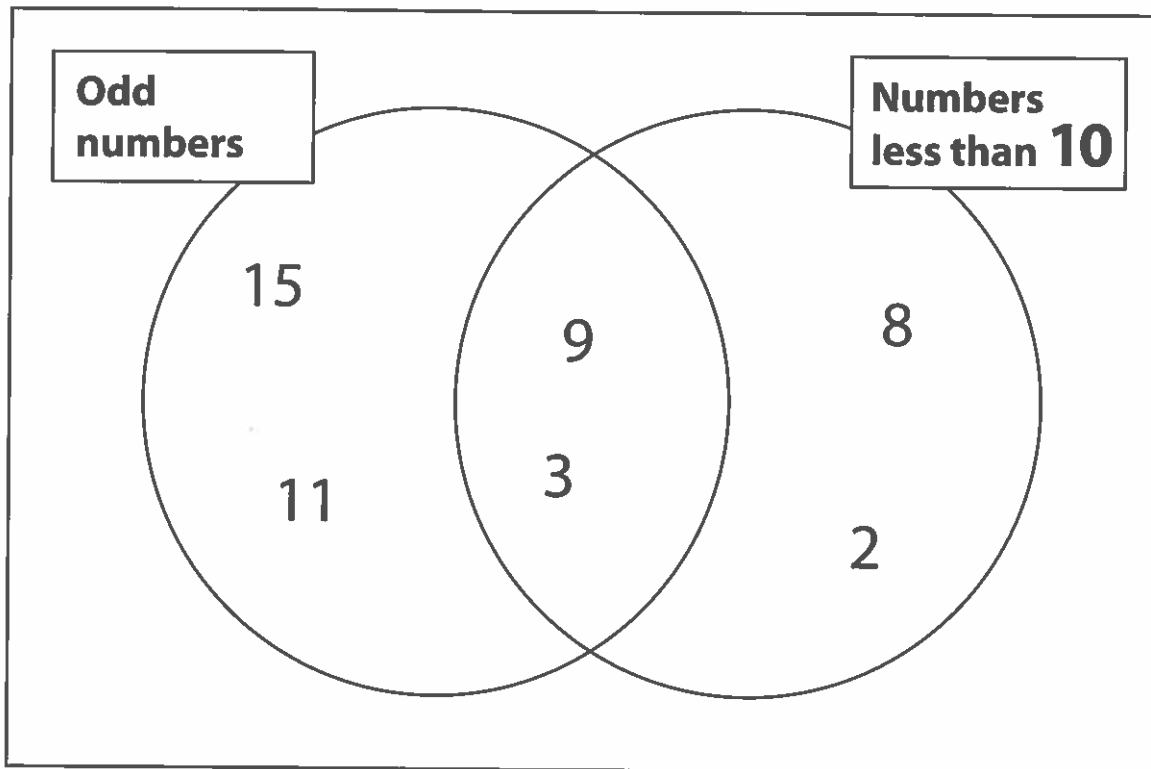


At midnight it is 8°C colder than at midday.

At midnight it is °C



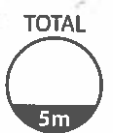

12 Put the number 5 in the correct place on the Venn diagram.



13 Maja faces east.

She makes a half turn.

Now which direction is she facing?



14 Gareth has these coins.

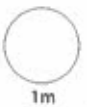


How much money does he have?



He wants to buy this notebook.

How much more money does he need?



15

Double 35 is

Half of 42 is



- 16 In this box of pencils $\frac{1}{3}$ of the pencils are red.

There are 5 red pencils.



How many pencils are in the box **altogether**?

pencils altogether

1m

- 17 Mr Jones drives to work at 7 : 05 am.

He gets to work at 8 : 00 am.

How long does it take him to drive to work?

minutes

1m

- 18 $9 \div 3$ gives the same answer as $12 \div$

1m

19

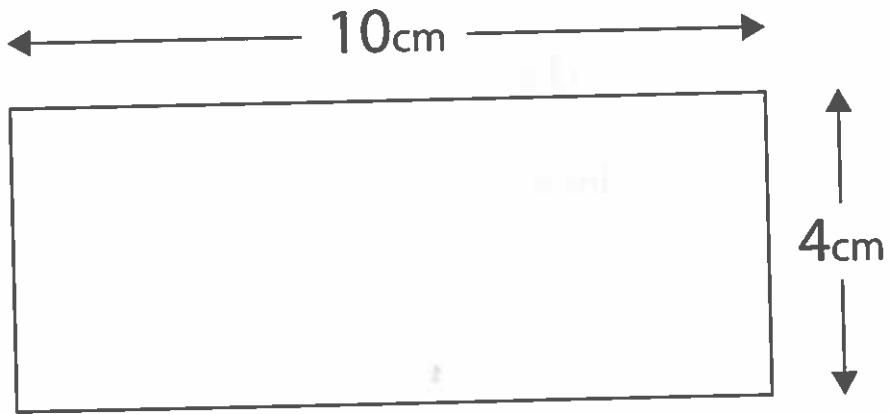


Use three of these signs to complete the number sentence.

8 ○ 5 ○ 24 ○ 11



20 What is the perimeter of this rectangle?



21



8 cakes in each bag

6 people want 4 cakes each.

How many **bags** of cakes do they need?

bags

2m

TOTAL
5m