

PROCEDURAL

4EP17

First name _____

Last name _____

School _____

Class _____

Date of birth ○○ ○○ ○○○○

Date of test ○○ 05 2017

Total score (maximum 35)



150253



Llywodraeth Cymru
Welsh Government

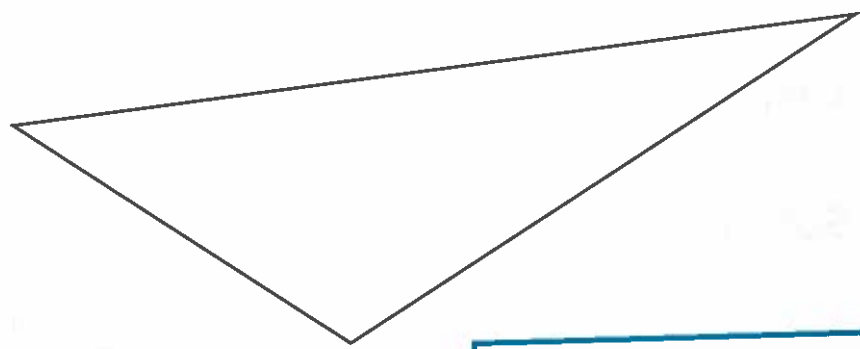
1

$$15 + 25 + 60 = \boxed{}$$

$$60 - 25 - 15 = \boxed{}$$

2

Use your ruler to measure the **longest** side of this triangle.



 cm and mm

3

Cards
6 cards in 1 pack



Mrs Jones has 42 of these cards.
How many **packs** does she have?

 packs

4

Children in Class 4

	number of right-handed children	number of left-handed children
girls	12	4
boys	9	5

More **girls** are right-handed than are left-handed.

How many more?



In Class 4, how many children are there **altogether**?



5

Round 627 to the nearest 10



Round 627 to the nearest 100

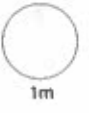


6

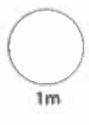
Sports some children play

	swimming	football	cycling	rugby	basketball
Tom	✓				✓
Bryn	✓		✓	✓	
Lev	✓	✓	✓		✓
Meg		✓		✓	
Aya	✓			✓	✓

How many children play exactly 3 sports?



Who plays both football and rugby?




7

Half of 270 =



8

What fraction of this shape is shaded?



9

$$81 \div 3 = \boxed{}$$

1m

10 Here is part of a calendar.

August					
Sunday		6	13	20	27
Monday		7	14	21	28
Tuesday	1	8	15	22	29
Wednesday	2	9	16	23	30
Thursday	3	10	17	24	31
Friday	4	11	18	25	
Saturday	5	12	19	26	

Hassan starts his holiday on 4th August.

His holiday ends 10 days later.

On what **day** of the week does his holiday end?

1m

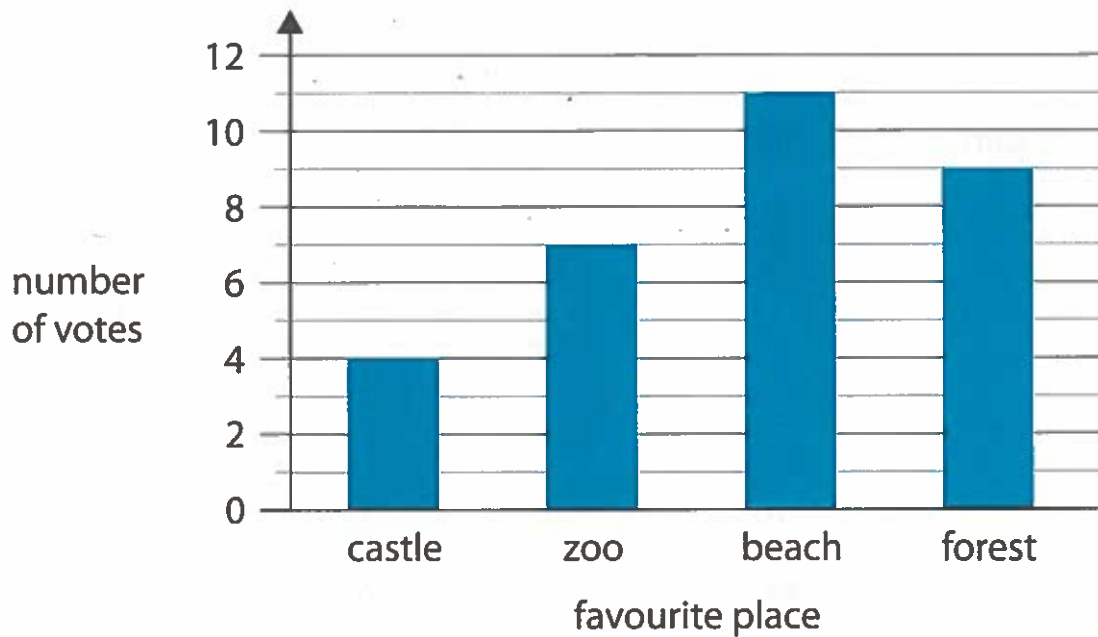
On the **third Friday** in August, Hassan goes to the dentist.

What **date** is that?

1m

11 Some children plan a day out.

They vote for their favourite place.



How many children do **not** vote for the beach?

children



12 Write the **number** that is 50 less than **one thousand**.



13 Write in order.

0°C -5°C 3°C -2°C

--	--	--	--

coldest

warmest



1m

14 Here are four number cards:

7	3	2	9
---	---	---	---

Use all four cards to make the **smallest** number possible.

--	--	--	--



1m

Use **three** of the cards to make the number that is **nearest** to 300

--	--	--




1m

15 $3 \times 6 = \square + 6$



1m


- 16 This game costs £7.50
Elin saves 50p a week to buy the game.
For how many weeks does she save?



weeks

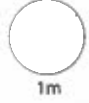


17 $4.5 \times \square = 45$



- 18 Jess has £3.24
She gives **half** to her brother.
How much does she give to her brother?

£



19 Complete the missing times.

09 : 30

half past nine

15 : 45

quarter _____

19 : 15

quarter _____



20




Potatoes
1kg costs
£1.25

Carrots
1kg costs
60p



Mr Thomas buys 4kg of potatoes and 2kg of carrots.
He pays with a £10 note.
How much change does he get?



£



21 A show starts at

18 : 50


The show lasts 1 hour and 15 minutes.

The show ends at

:

1m

22 A farmer has 4 trays of eggs.
Each tray has 24 eggs.



He sells $\frac{1}{3}$ of all of the eggs.

How many eggs does he sell?



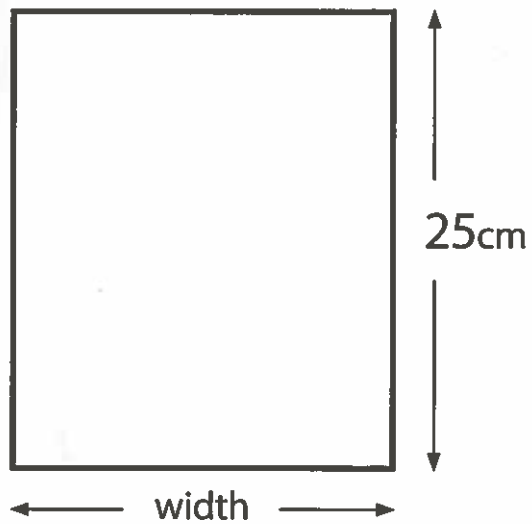
eggs

2m

23 Work out the difference between 536 and 571



24 A rectangle of card is 25cm long.



Do **not** use a ruler!
It is not full size.

The **perimeter** of the card is 92cm.

Work out the width of the card.

